

# Calendar Journal

\*Today is:

Monday	Tuesday	Wednesday	Thursday	Friday
--------	---------	-----------	----------	--------




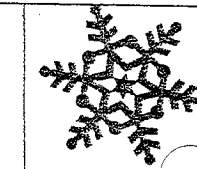
\*The month is:

January	February
March	April
May	June
July	August
September	October
November	December

\*The year is:

2013	2014	2015
------	------	------

\*The season is:

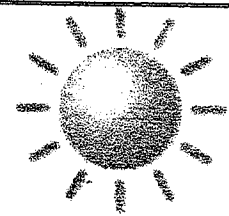

			
Spring	Summer	Fall	Winter

\*The date is:


1	2	3	4	5	6	7
8	9	10	11	12	13	14
15	16	17	18	19	20	21
22	23	24	25	26	27	28
29	30	31				

\*The temperature is:

<div style="font-size: 2em; font-weight: bold;">°F</div>
--




sunny




cloudy



rainy



partly cloudy




snowy

# What Is the Time? A

Name: \_\_\_\_\_

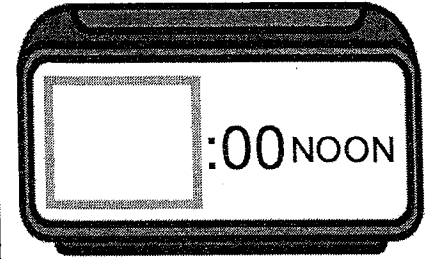
Circle each correct answer and write the time on the digital clock.

Aquarium workers will feed fish milkshakes to Hope this afternoon. What time will they feed Hope?




12:00

9:00




Tonight two fishermen found a baby dolphin. What time did they find the baby dolphin?




8:00

7:00




Early tomorrow morning, aquarium workers will try to rescue a dolphin from the ocean. What time will they leave for the rescue?

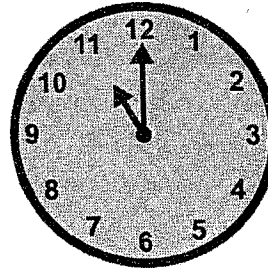


6:00

5:00




Later this morning the class will go see the new "Dolphin Tale 2" movie. What time will the class go see the movie?




11:00

10:00




Saturday afternoon we visited an aquarium. We arrived at the aquarium at 2 o'clock and stayed for 2 hours. What time did we leave the aquarium?



2:00

4:00



# Word Problems

Name: \_\_\_\_\_

Yesterday the aquarium rescued \_\_\_\_\_ dolphins from the ocean.



Today the aquarium rescued \_\_\_\_\_ dolphins from the ocean.



How many dolphins did the aquarium rescue altogether on both days?

Show your work.

+

Answer

Doctors helped \_\_\_\_\_ injured pelicans on Tuesday.



Doctors helped \_\_\_\_\_ injured pelicans on Wednesday.



How many more pelicans did the doctors help on Tuesday than on Wednesday?

Show your work.

-

Answer